

question

4

points
(max 10):

NOTES, ACCIDENTALS AND KEY SIGNATURE

Write down the requested notes on the staff below.
Take care that all the notes are clearly readable.

G F G Ab Bb Ab A E F# G

question

5

points
(max 10):

MAJOR AND MINOR

Write down the names under all the chords on the staff below:
(example: C-minor, D-major...etc.)

question

6

points
(max 10):

ITALIAN WORDS AND SIGNS

Study the example and answer the questions.
Mind that some questions are related!

- a) Where do you have to proceed after bar nr 9? _____
- b) Where do you have to go when you arrive for the first time in bar 6? _____
- c) Where do you have to go when you arrive for the second time in bar 6? _____
- d) Why is there 8va--- above both staves? _____
- e) What is the speed of the piece above? _____

question

7

points
(max 10):

SLURS AND DOTS

In the example below
you have to add slurs or dots.
Read the instructions carefully.



- a What is the meaning of the dots in bar nr. 1?
- b And the meaning of the slur in bar nr. 1?
- c And the meaning of the dots in bar nr. 2?
- d And the meaning of the slurs in bar nr. 3?
- e And the meaning of the dots in bar nr. 4?


question

8

points
(max 10):

INTERVALS

Write down the requested intervals on the staff.
Take the note c as the bottom note.
Write clearly, so that the notes are readable.



octave fifth minor third major third second

question

9

points
(max 10):

TIME SIGNATURE AND METER

Look very well at the example below
and write down the number of beats on the dotted lines
under some of the notes.



question

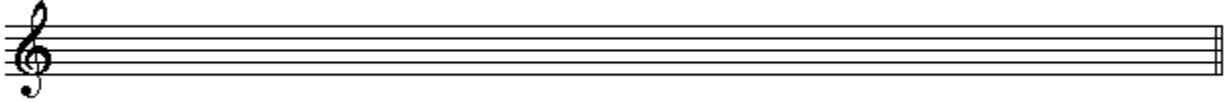
10

points
(max: 10):

THE NATURAL SCALE AND OTHER SCALES

Write down the requested scales on the empty staves.
Read the instructions carefully
and write readable.


a The C major scale:




b The F major scale:



c The g minor scale:



d The e minor scale:



e The natural scale with all the steps:

